

# Missing Numbers

Fill in the missing numbers from these sections of hundred squares.


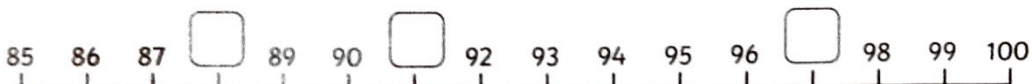
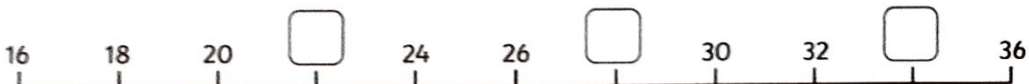
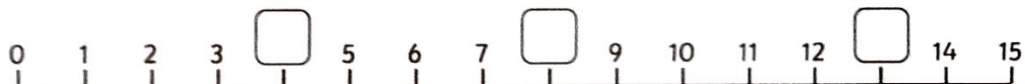
14	15		17
	25	26	

83		85	86
93			96

36	37	
		48
56	57	58

		10
18	19	20
28	29	

Fill in the missing numbers in these number lines.



# Missing Numbers - Answers

Fill in the missing numbers from these sections of hundred squares.

14	15	16	17
24	25	26	27

83	84	85	86
93	94	95	96

36	37	38
46	47	48
56	57	58

8	9	10
18	19	20
28	29	30

Fill in the missing numbers in these number lines.

