
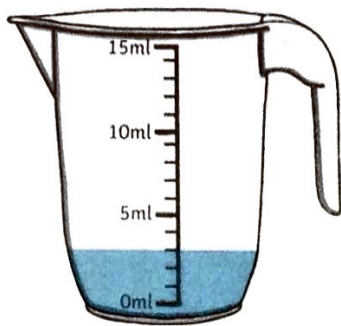


# Measuring in ml


How much liquid is in each jug?




1. \_\_\_\_\_ ml



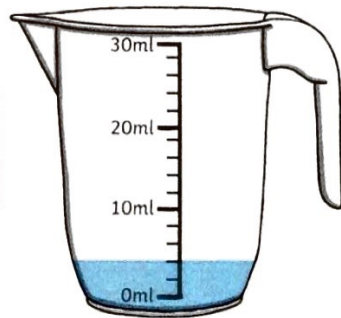
2. \_\_\_\_\_ ml



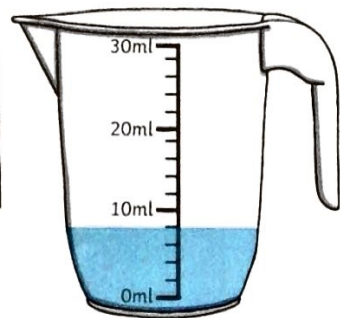
3. \_\_\_\_\_ ml



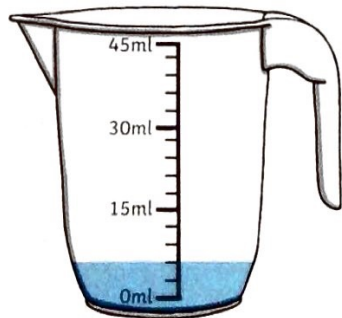
4. \_\_\_\_\_ ml



5. \_\_\_\_\_ ml




6. \_\_\_\_\_ ml




7. \_\_\_\_\_ ml



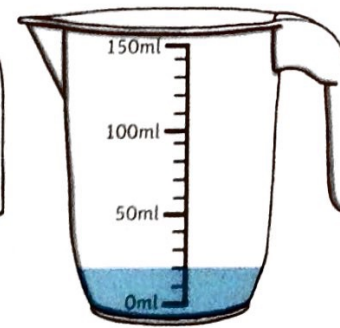
8. \_\_\_\_\_ ml



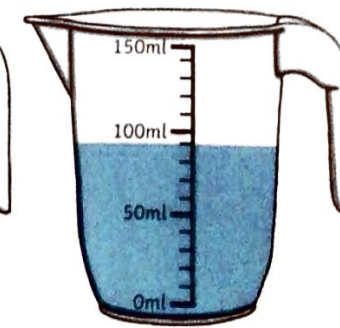
9. \_\_\_\_\_ ml



10. \_\_\_\_\_ ml



11. \_\_\_\_\_ ml



12. \_\_\_\_\_ ml

## Measuring in ml - Answers

1. **6ml**

2. **3ml**

3. **12ml**

4. **16ml**

5. **4ml**

6. **8ml**

7. **6ml**

8. **39ml**

9. **27ml**

10. **70ml**

11. **20ml**

12. **90ml**