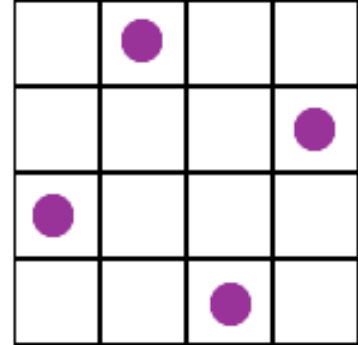
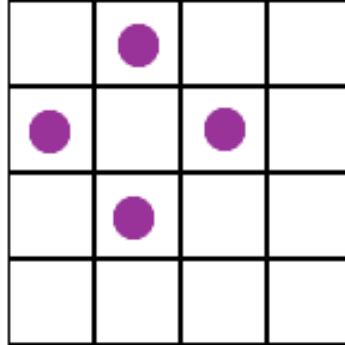
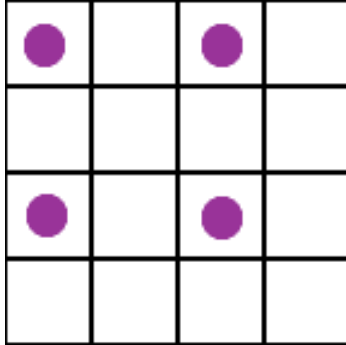




Square Corners

On each of these grids the counters lie at the four corners of a square:



What is the greatest number of counters you can place on the grid below without four of them lying at the corners of a square?

