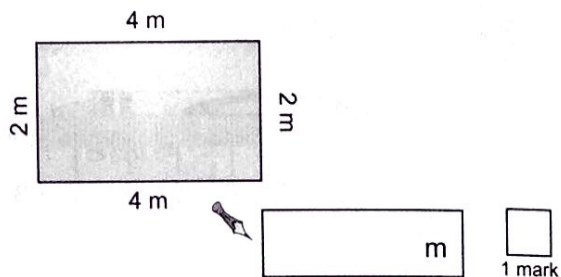


Perimeter

1

Claire's garden is a rectangle.

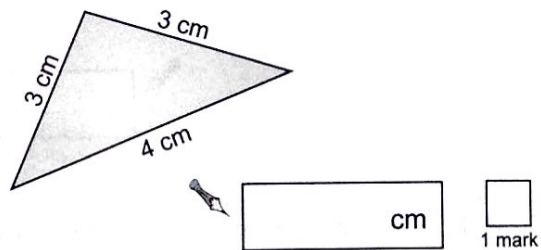
Work out its perimeter.



2

Look at the triangle to the right.


Work out its perimeter.



3

A shape has sides of length 2 cm, 3 cm, 5 cm, 1 cm, and 4 cm.

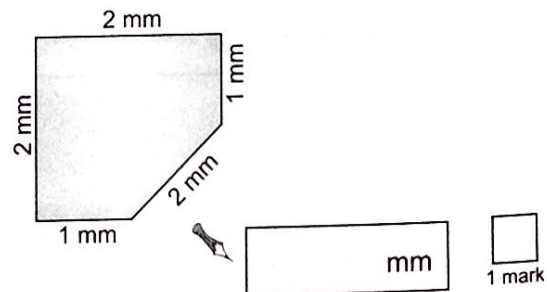
Work out its perimeter.



4

Look at the shape to the right.

Work out its perimeter.



Perimeter

5

Here is a centimetre square grid.


Draw a rectangle with a perimeter of 16 cm.




1 mark

6

Look at this shape.

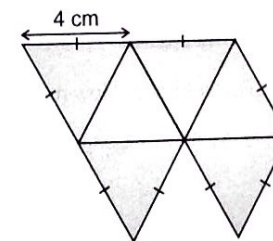


Measure the total perimeter of this shape using a ruler.




7

Leona makes a shape using equilateral triangles.



Not actual size

Each side of a triangle is 4 cm long. What is the perimeter of the shape?



"I can measure the perimeter of a 2D shape."

