

Angles in quadrilaterals

Sheet 1

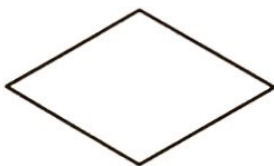
Colour acute angles red. Colour obtuse angles blue. Mark right angles with a square.
Write the name of each type of quadrilateral.

Fill in the information for each quadrilateral.


1.



2.



3.



Number of acute angles: _____

Number of obtuse angles: _____

Number of right angles: _____

Number of acute angles: _____

Number of obtuse angles: _____


Number of right angles: _____

Number of acute angles: _____

Number of obtuse angles: _____

Number of right angles: _____

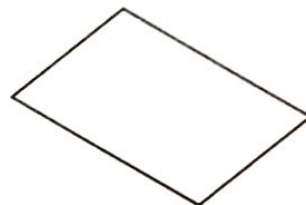
4.



5.



6.



Number of acute angles: _____

Number of obtuse angles: _____

Number of right angles: _____

Number of acute angles: _____

Number of obtuse angles: _____

Number of right angles: _____

Number of acute angles: _____

Number of obtuse angles: _____

Number of right angles: _____

Day 3 Angles in quadrilaterals Sheet 1

1.



Rectangle

Number of acute angles: 0
Number of obtuse angles: 0
Number of right angles: 4

2.



Rhombus

Number of acute angles: 2
Number of obtuse angles: 2
Number of right angles: 0


3.



Trapezoid

Number of acute angles: 2
Number of obtuse angles: 2
Number of right angles: 0


4.



Trapezoid

Number of acute angles: 1
Number of obtuse angles: 1
Number of right angles: 2

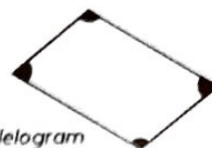
5.



Square

Number of acute angles: 0
Number of obtuse angles: 0
Number of right angles: 4

6.



Parallelogram

Number of acute angles: 2
Number of obtuse angles: 2
Number of right angles: 0