





Example

A right angle is an angle that equals 90° or a quarter turn.



right angle

Tick all the right angles.



Circle the right angles in these shapes.

