





We start each numeracy lesson with a mental and oral starter.

Pick one of these problems to complete each day.

1 The pictogram shows the number of children who walk to school each day.

Monday	
Tuesday	
Wednesday	

 = 2 children

There are 20 children in the class.

How many children did not walk to school on Tuesday?

1 Mary makes toys

- On Monday she makes 7 toys.
- On Tuesday she makes 8 toys.

By Wednesday she has to make 20 toys in total.

How many toys does Mary need to make on Wednesday?

1 Here is how much it costs to go to the zoo.



Mr Jones and his 3 children go to the zoo.

How much does it cost them altogether?

2 If

$$\triangle + \triangle = 12$$

$$\heartsuit + \triangle = 19$$

What is the value of  ?

3 What are the missing numbers?

$$\square \times 10 = 40$$

$$\square \div 10 = 7$$