

You may want to use your 100 square or real coins to help you work out the answer to these word problems.

Addition and Subtraction with Change




2. Janine has 18p in her purse. She puts 10p in the collection for Comic Relief. How much does she have left?



Addition and Subtraction with Change



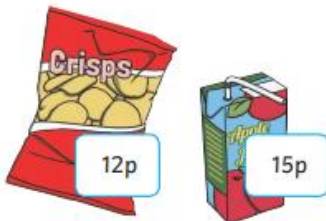
3. Sabina's mother gives her 20p to buy her brother a banana. She buys a banana for 16p. How much change will she receive?



Addition and Subtraction with Change



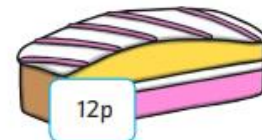
1. Jack buys a packet of crisps and a drink. How much do they cost altogether?



Addition and Subtraction with Change



4. Annie has 20p. She gives her brother 12p to buy a cake at the school fair. How much money will she have left?



Addition and Subtraction with Change



2. Poppy has 87p in her purse. She puts 50p in the collection for Children in Need. How much does she have left?



Addition and Subtraction with Change



3. Halim's mother gives him £1 to buy his sister a birthday present. He buys a pencil for 46p. How much change will he receive?

