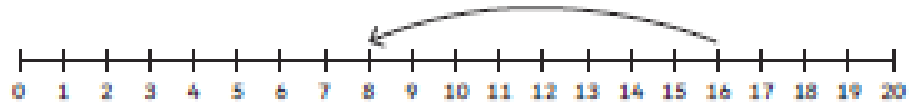


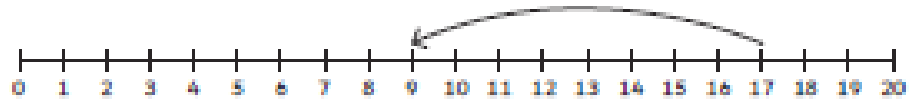
Subtraction within 20 on a Number Line - Sheet 2

Practise what you have learnt so far on a number line to 20 and progress to see if you can draw your own number line!

$16 - 8 = 8$



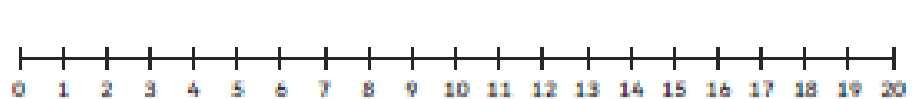
$\square - \square = \square$



$\square - \square = \square$



$\square - \square = \square$



$\square - \square = \square$



$\square - \square = \square$



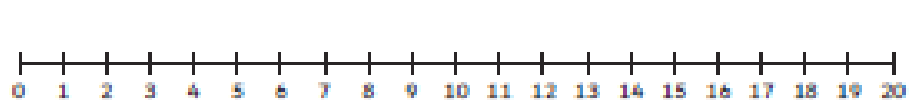
$\square - \square = \square$



$\square - \square = \square$



$\square - \square = \square$



$\square - \square = \square$

