

Beginners 16
3
$\times 3$
$\times 3$
Double it
$+ 9$
$+ 9$
$+ 8$
$\div 5$
$\times 4$
$\times 4$
Answer =

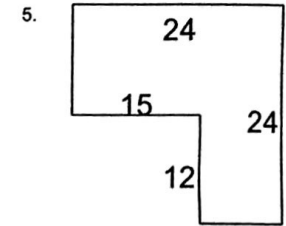
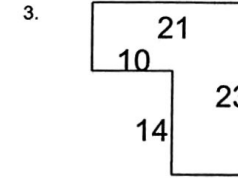
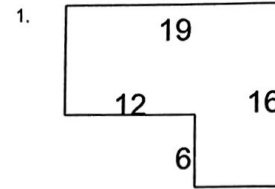
Beginners 17
450
$\div 10$
$\div 5$
Times by itself
$+ 7$
$\div 8$
$+ 10$
$\div 7$
Times by itself
$+ 12$
Answer =

Beginners 18
12
$\times 4$
Half of it
$- 6$
Double it
$\div 6$
$+ 9$
$\times 3$
Double it
$\div 9$
Answer =

## Area and perimeter of irregular shapes

Grade 6 Geometry Worksheet

Find the perimeter and area.



\_\_\_\_\_

\_\_\_\_\_

\_\_\_\_\_

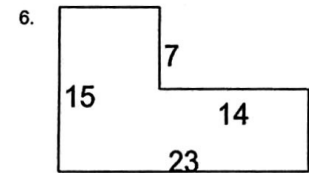
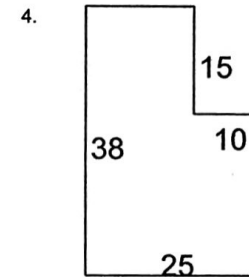
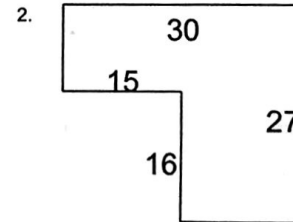
## Negative Numbers

### Addition

2.  $-6 + 8 =$  \_\_\_\_\_    3.  $-5 + 5 =$  \_\_\_\_\_    4.  $-3 + 7 =$  \_\_\_\_\_    5.  $-2 + 5 =$  \_\_\_\_\_  
 6.  $4 - 8 =$  \_\_\_\_\_    7.  $6 - 9 =$  \_\_\_\_\_    8.  $2 - 7 =$  \_\_\_\_\_    9.  $8 - 9 =$  \_\_\_\_\_  
 10.  $-7 + 4 =$  \_\_\_\_\_    11.  $-9 + 5 =$  \_\_\_\_\_    12.  $-5 + 4 =$  \_\_\_\_\_    13.  $-10 + 7 =$  \_\_\_\_\_

### Subtraction

14.  $7 - 9 =$  \_\_\_\_\_    15.  $4 - 5 =$  \_\_\_\_\_    16.  $1 - 8 =$  \_\_\_\_\_    17.  $6 - 12 =$  \_\_\_\_\_  
 18.  $-2 - 5 =$  \_\_\_\_\_    19.  $-5 - 10 =$  \_\_\_\_\_    20.  $-3 - 7 =$  \_\_\_\_\_    21.  $-6 - 5 =$  \_\_\_\_\_



\_\_\_\_\_

\_\_\_\_\_

\_\_\_\_\_